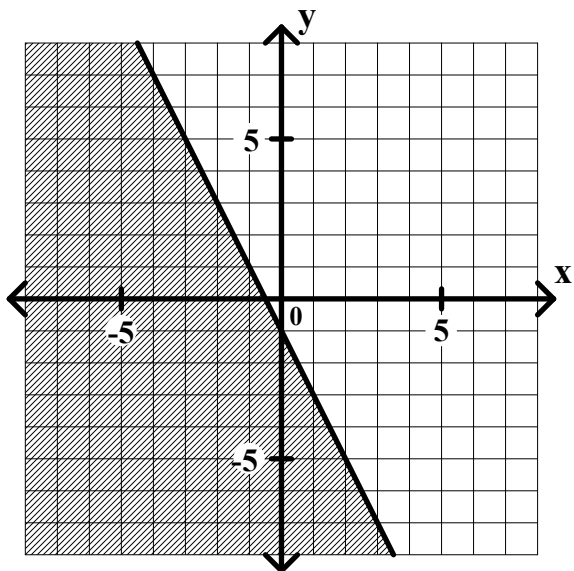


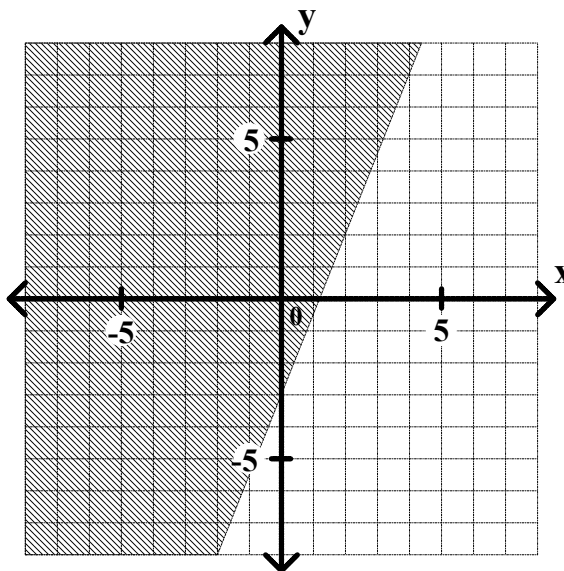
General Algebra II Worksheet #2 Unit 4 Selected Solutions

Graph each of the following linear inequalities.

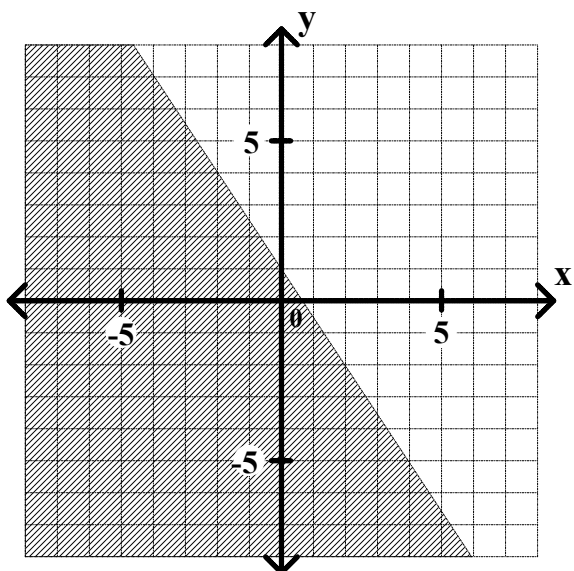
2. $y \leq -2x - 1$



4. $y > \frac{5}{2}x - 3$



8. $3x + 2y < 2$
 $2y < -3x + 2$
 $y < -\frac{3}{2}x + 1$



9. $x - 4y \leq 8$
 $-4y \leq -x + 8$
 $y \geq \frac{1}{4}x - 2$

