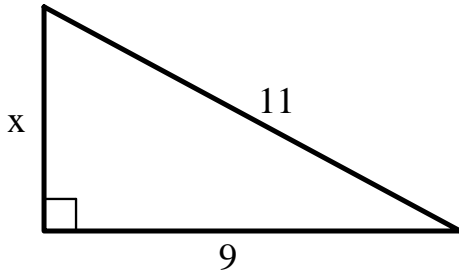


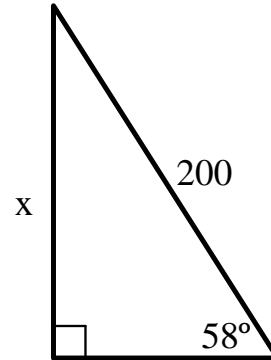
General Algebra II Class Worksheet #1 Unit 13 page 1 _____

Find the value of x in each of the following. You must show the equation you used to find x . The drawings are not to scale. Round your solutions to the nearest hundredth.

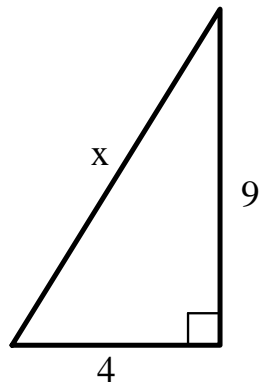
1. $x \approx$ _____



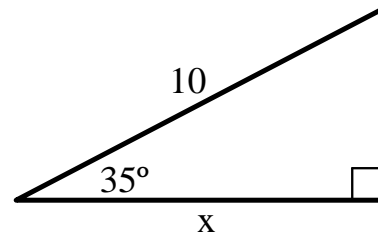
2. $x \approx$ _____



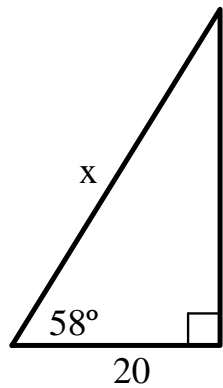
3. $x \approx$ _____



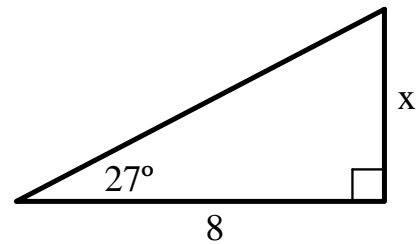
4. $x \approx$ _____



5. $x \approx$ _____



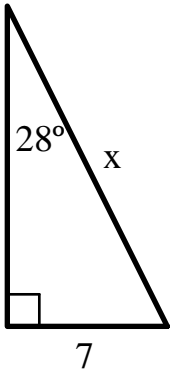
6. $x \approx$ _____



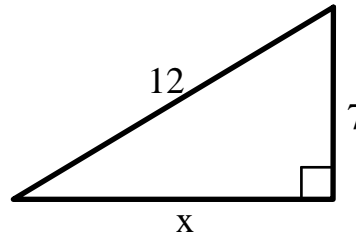
General Algebra II Class Worksheet #1 Unit 13 page 2

Find the value of x in each of the following. You must show the equation you used to find x . The drawings are not to scale. Round your solutions to the nearest hundredth.

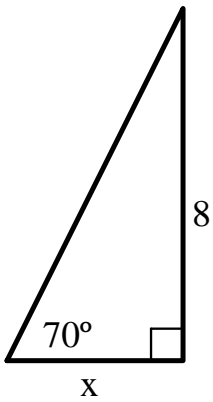
7. $x \approx$ _____



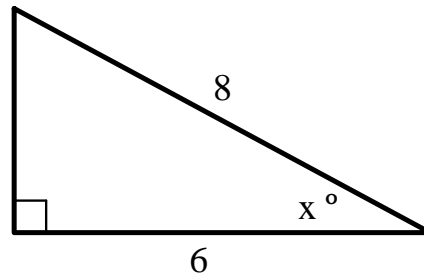
8. $x \approx$ _____



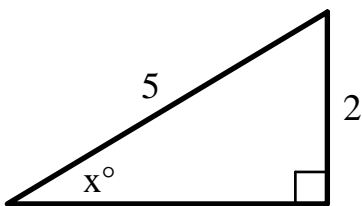
9. $x \approx$ _____



10. $x \approx$ _____



11. $x \approx$ _____



12. $x \approx$ _____

