

Algebra II Class Worksheet #5 Unit 3 page 1 _____


A rectangular water tank is 6 feet long, 4 feet wide, and 3 feet deep. The tank is empty initially and water is pumped into the tank at 4 cubic feet per minute until the tank is full.

Let t represent the time that water has been pumped into the tank (in **minutes**). Let $f(t)$ represent the **depth of the water** in the tank (in **inches**). Answer each of the following. Show your process neatly organized.

1. How long will it take to fill the tank? _____

2. Make a table giving t and $f(t)$ every 3 minutes from $t = 0$ until the tank is full.

3. Graph function f .



4. Write an equation giving $f(t)$ in terms of t . _____

5. What is the domain of function f ?

6. What is the range of function f ?

7. Evaluate $f(4)$. What does $f(4)$ represent in terms of the problem?

8. If $f(t) = 30$, then find the value of t . Describe what this value of t represents in terms of the problem.

Algebra II Class Worksheet #5 Unit 3 page 2


A rectangular water tank is 10 feet long, 4 feet wide, and 3 feet deep. The tank is full initially and water is drained out of the tank at 6 cubic feet per minute until the tank is empty.

Let t represent the time that water has been draining out of the tank (in **minutes**). Let $F(t)$ represent the **depth of the water** in the tank (in **inches**). Answer each of the following. Show your process neatly organized.

9. How long will it take to empty the tank? _____

10. Make a table giving t and $F(t)$ every 5 minutes from $t = 0$ until the tank is empty.

11. Graph function F .



12. Write an equation giving $F(t)$ in terms of t . _____

13. What is the domain of function F ?

14. What is the range of function F ?

15. Evaluate $F(15)$. What does $F(15)$ represent in terms of the problem?

16. If $F(t) = 27$, then find the value of t . Describe what this value of t represents in terms of the problem.

Algebra II Class Worksheet #5 Unit 3 page 3


A rectangular water tank is 8 feet long, 5 feet wide, and 3 feet deep. The tank is half full initially and water is pumped into the tank at 2 cubic feet per minute until the tank is full.

Let t represent the time that water has been pumped into the tank (in **minutes**). Let $F(t)$ represent the **depth of the water** in the tank (in **inches**). Answer each of the following. Show your process neatly organized.

17. How long will it take to fill the tank? _____

18. Make a table giving t and $F(t)$ every 5 minutes from $t = 0$ until the tank is full.

19. Graph function F .



20. Write an equation giving $F(t)$ in terms of t . _____

21. What is the domain of function F ?

22. What is the range of function F ?

23. Evaluate $F(10)$. What does $F(10)$ represent in terms of the problem?

24. If $F(t) = 30$, then find the value of t . Describe what this value of t represents in terms of the problem.