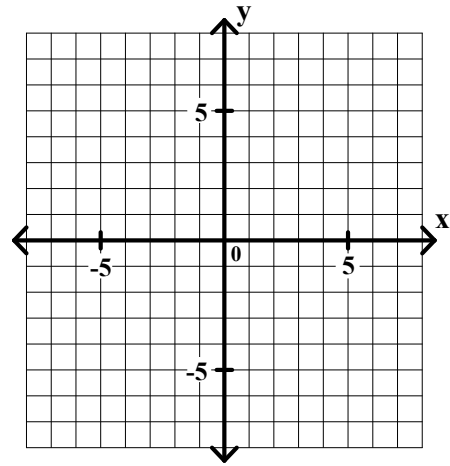
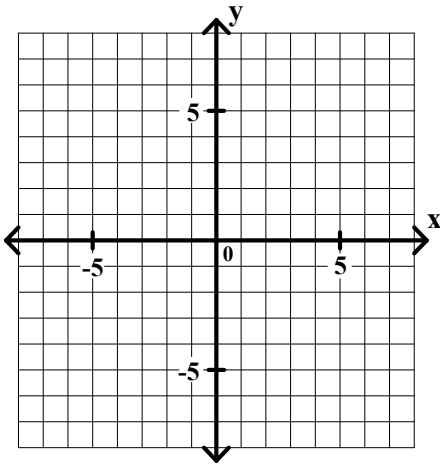


Algebra I Class Worksheet #1 Unit 9 page 1 _____

Use the graphing method to solve each of the following systems of equation.

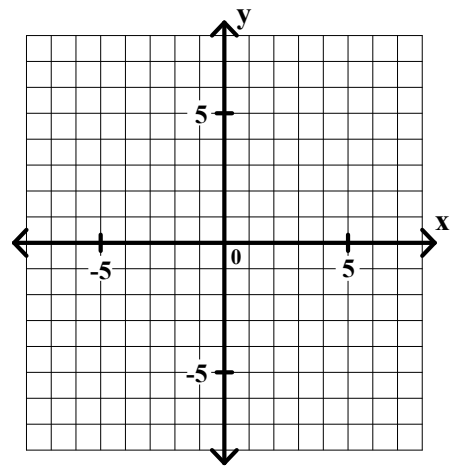
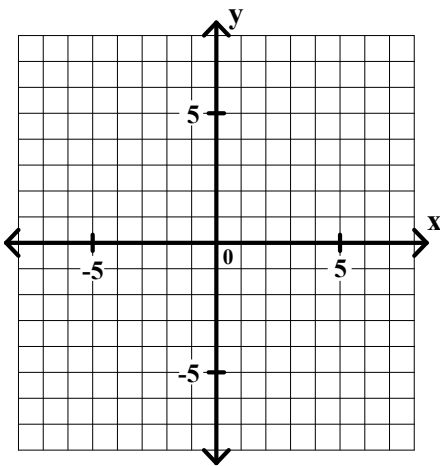
1. $y = 2x + 1$ $x = \underline{\hspace{2cm}}$
 $y = -3x + 6$ $y = \underline{\hspace{2cm}}$

2. $y = x - 4$ $x = \underline{\hspace{2cm}}$
 $y = -2x + 5$ $y = \underline{\hspace{2cm}}$



3. $y = x + 4$ $x = \underline{\hspace{2cm}}$
 $y = \frac{2}{3}x - 1$ $y = \underline{\hspace{2cm}}$

4. $y = -2x - 7$ $x = \underline{\hspace{2cm}}$
 $y = \frac{1}{2}x - 2$ $y = \underline{\hspace{2cm}}$

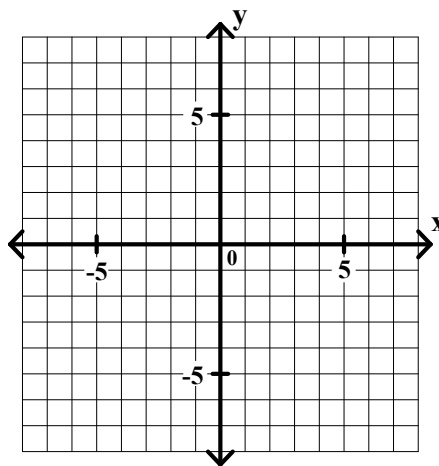
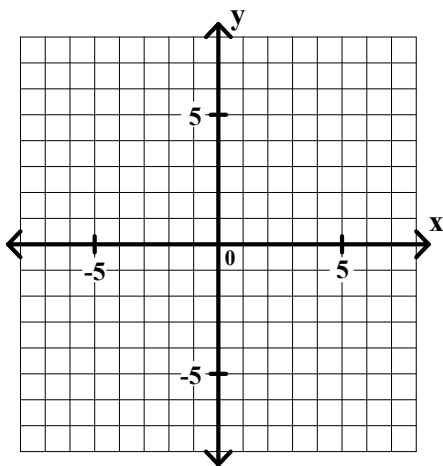


Algebra I Class Worksheet #1 Unit 9 page 2

Use the graphing method to solve each of the following systems of equation.

5. $x - 2y = -4$ $x = \underline{\hspace{2cm}}$
 $3x + 2y = 12$ $y = \underline{\hspace{2cm}}$

6. $x - y = 2$ $x = \underline{\hspace{2cm}}$
 $x + 2y = 8$ $y = \underline{\hspace{2cm}}$



7. $-2x + y = 2$ $x = \underline{\hspace{2cm}}$
 $x - 3y = 9$ $y = \underline{\hspace{2cm}}$

8. $3x - 4y = 24$ $x = \underline{\hspace{2cm}}$
 $5x + 2y = 14$ $y = \underline{\hspace{2cm}}$

