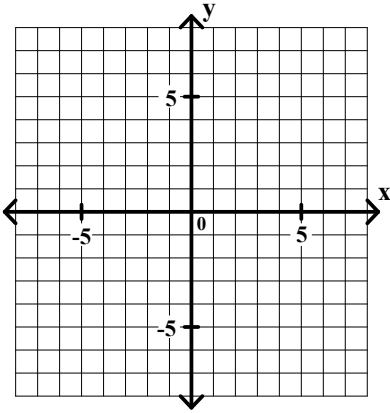


# Algebra I Worksheet #7 Unit 7 page 1

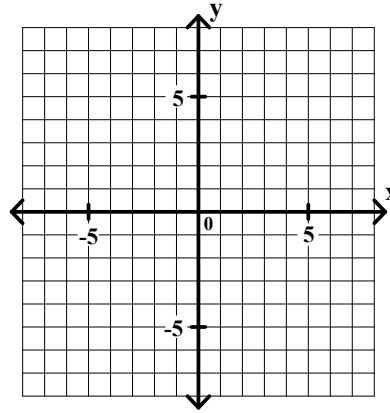
---

Graph each of the following.

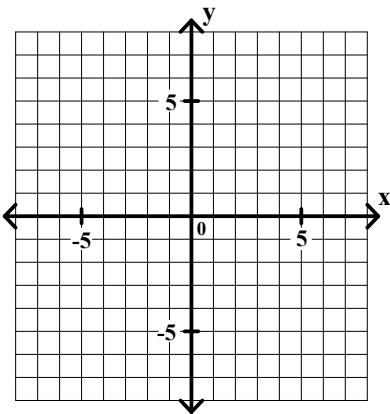
1.  $y \leq \frac{4}{3}x + 3$



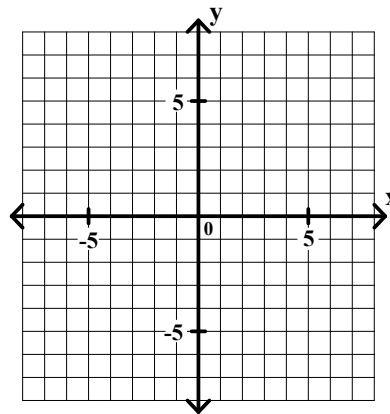
2.  $y < \frac{2}{5}x - 2$



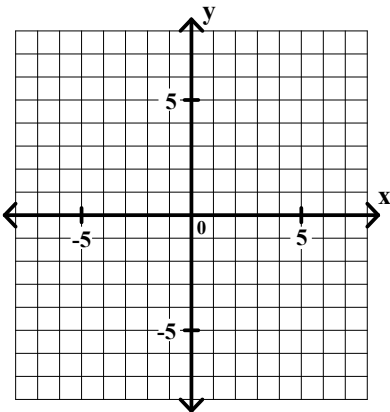
3.  $y > \frac{2}{3}x - 3$



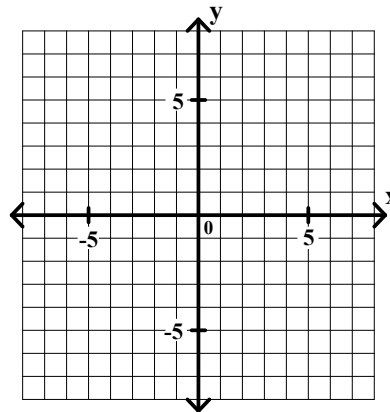
4.  $y \geq x$



5.  $3x + 5y < 10$



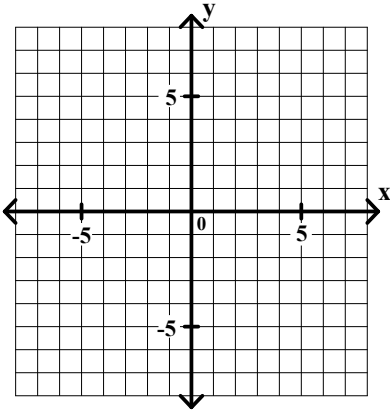
6.  $2x - 5y \leq 10$



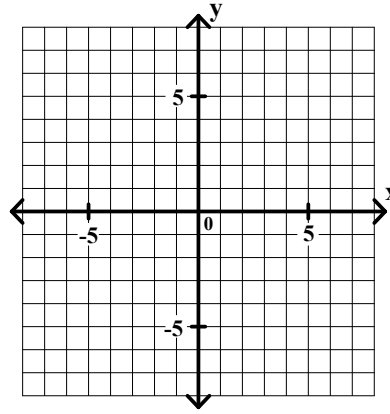
# Algebra I Worksheet #7 Unit 7 page 2

Graph each of the following.

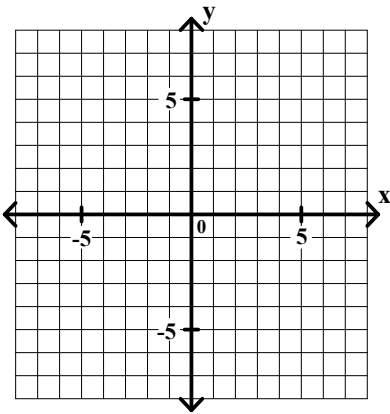
7.  $5x + 3y > 12$



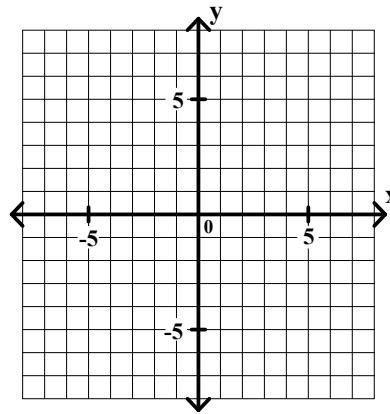
8.  $3x - 2y \geq 12$



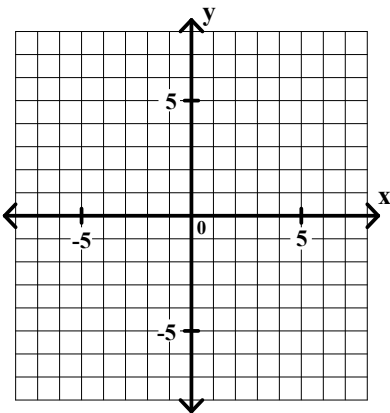
9.  $x + 2y \leq 0$



10.  $x - 3y > 0$



11.  $-3x + 2 < 8$



12.  $5y - 4 \leq 6$

