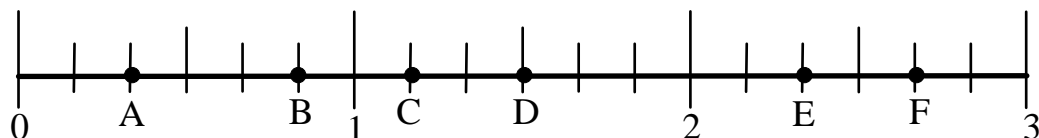


Advanced Challenge Level 1 Problem #7

For this problem you are given several number lines. You must give the number associated with each of the lettered points on the line. If the number is greater than 1, then you must write the number as a fraction in lowest terms and also as a mixed number.

I.



1. A =

2. B =

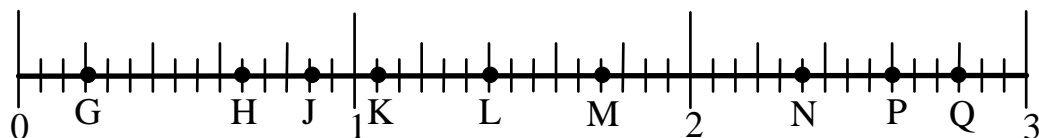
3. C =

4. D =

5. E =

6. F =

II.



7. G =

8. H =

9. J =

10. K =

11. L =

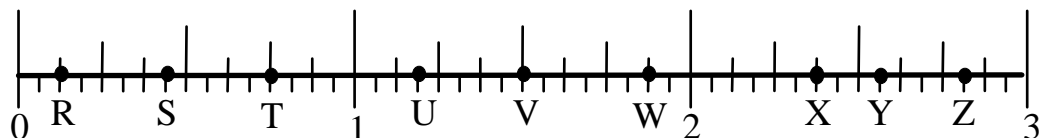
12. M =

13. N =

14. P =

15. Q =

III.



16. R =

17. S =

18. T =

19. U =

20. V =

21. W =

22. X =

23. Y =

24. Z =